

Class : III

Subject Enhancement Material

Sub: English

Syllabus: II

Read the passage carefully and answer the questions.

Rico's class went to the school carnival today. It was a lot of fun. Rico won two prizes. He won a blue balloon and a toy car. He had a great time his friends. First he played a few games. Then he got popcorn and lemonade with his friends. Finally he got to watch a magic show. Rico can't wait to get home and tell his parents all about his fun today.

Questions:

1. Where did Rico's class go to?

A. _____

2. What did Rico win?

A. _____

3. What did he do first?

A. _____

4. What did Rico eat at the carnival?

A. _____

Write the meanings for the following.

1. Look = _____

2. Difficult = _____

3. Small = _____

Write the opposites for the following.

1. Far X _____

2. Clever X _____

3. Happy X _____

4. Honest X _____

5. Able X _____

Write the full forms for the following.

1. I'm = _____

2. Don't = _____

3. She's = _____

Circle the nouns in the given sentences.

1. Ramu is a good boy.

2. Nina has curly hair.

3. Liza is in the garden.

Circle the pronouns in the given sentences.

1. Ravi is my brother. He is ten years old.

2. Asha and Roma are in the park. They are playing on the slide.

3. Look at that lady in the yellow saree. She is my aunt.

Fill in the blanks with correct verbs from the brackets.

1. Jaal is _____. (sleeping / sleep)

2. The children are _____ in the park. (played/ playing)

3. The bird _____ away. (flew / fly)

Fill in the blanks with correct adverbs.

1. The lion roared _____ (loudly / neatly)

2. Varun crossed the road _____ (carefully / lovingly)

3. The cat _____ jumped over the wall. (quickly / loudly)

Fill in the blanks with conjunctions (and/ or / but)

1. Put your socks _____ shoes.

2. You can either have an ice cream _____ some juice.

3. I like mangoes _____ I don't like oranges.

What do these people do? Match the columns to make correct sentences.

- | | |
|----------------|-----------------------------|
| 1. A florist | a. bakes cakes and biscuits |
| 2. A carpenter | b. cuts hair |
| 3. A baker | c. treats the sick |
| 4. A barber | d. sells flowers |
| 5. A doctor | e. makes furniture |

Make smaller words from these words

<div style="border: 1px solid black; border-radius: 50%; width: 150px; height: 60px; margin: 0 auto; display: flex; align-items: center; justify-content: center;">fairy</div>	<div style="border: 1px solid black; border-radius: 50%; width: 150px; height: 60px; margin: 0 auto; display: flex; align-items: center; justify-content: center;">teacher</div>	<div style="border: 1px solid black; border-radius: 50%; width: 150px; height: 60px; margin: 0 auto; display: flex; align-items: center; justify-content: center;">chair</div>
<div style="border: 1px solid black; width: 120px; height: 30px; margin: 10px auto;"></div>	<div style="border: 1px solid black; width: 120px; height: 30px; margin: 10px auto;"></div>	<div style="border: 1px solid black; width: 120px; height: 30px; margin: 10px auto;"></div>
<div style="border: 1px solid black; width: 120px; height: 30px; margin: 10px auto;"></div>	<div style="border: 1px solid black; width: 120px; height: 30px; margin: 10px auto;"></div>	<div style="border: 1px solid black; width: 120px; height: 30px; margin: 10px auto;"></div>

SUBJECT ENHANCEMENT MATERIAL

Class – 3th

Telugu 2nd language

syllabus of 2nd

i.క్రింద ఇవ్వబడిన ప్రశ్నలకు సరైన సమాధానములను వ్రాయండి.

.....

1.నీ పేరు ఏమిటి? _____

2.నీవు ఏ తరగతి చదువు చున్నావు? _____

ii.క్రింది అచ్చు అక్షరాలకు గుణింతపు గుర్తులను వ్రాయండి.

3.ఆ _____ 5.ఋ _____

4.ఇ _____ 6.ఏ _____

5.ఈ _____ 7.ఒ _____

6.ఊ _____ 8.ఔ _____

9..అక్షరమాలను వ్రాయండి.

అచ్చులు :

10. హల్లులు :

11.క్రింది అక్షరాలకు గుణింతాలు వ్రాయండి.

1.క -----

2.చ _____

3.జ

4.త _____

5.డ _____

6.ప _____

7.మ _____

12.క్రింది అక్షరాలకు ఒత్తులు వ్రాయండి.

1. చ _____

2.జ _____

3.ఝ _____

4.ఢ _____

13 .రెండు పక్షుల పేర్లు వ్రాయండి .

14.రెండు పండ్ల పేర్లు వ్రాయండి .

15.రెండు జంతువుల పేర్లు వ్రాయండి .

16.రెండు కూరగాయల పేర్లు వ్రాయండి. _____

17.రెండు ఆకుకూరల పేర్లు వ్రాయండి .

.....

SUBJECT ENHANCEMENT MATERIAL FOR CLASS -3rd

SYLLABUS OF CLASS – 2nd

1. वर्णमाला लिखो ?

.....

.....

.....

.....

.....

.....

.....

2. दो अक्षर वाले शब्द लिखो

1	2
3	4

3. तीन अक्षर वाले शब्द लिखो

1	2
3	4

4. समान अर्थ वाले शब्द बताओ ?

फूल

पेड़

5. तुक वाले शब्द लिखो ?

1. नीला

2 आना

6. 'रु' तथा 'रू' से शब्द बनाकर लिखो ?

'रु'

रू

7. नाम वाले शब्द पहचानकर लिखना ?

1 राम आम खाता है ।

2 मोहन बाजा बजता है ।

8. वाक्यों में से काम वाले शब्द छांटकर लिखना ।

1 रमेश कहानी लिखता है ।

2 महिमा स्वेटर बनती है ।

9. सर्वनाम शब्द लिखना ?

1 तुमने मुझे केला दिया ।

2 वे मैदान में खेल रहे हैं ।

10. विशेषण शब्द की पहचानकर लिखना ।

1 राजीव मधुर गाता है ।

2 चोकलेट मीठी है ।

11. बारहखड़ी लिखो ?

क

छ

द

12. रंगों के नाम लिखो ?(कोई सात)

.....
.....

13. फलों के नाम लिखो ? (कोई पांच)

.....
.....

14. लिंग बदलना ?

नाना

शेर

15. बहुवचन बनाकर लिखो ?

रात कमरा

लड़की खिड़की

16. वर्णों को जोड़कर शब्द बनाओ ?

आ +ध +उ +न +इ +क +अ =

17. वाक्यों में उचित विराम चिन्ह लगा कर लिखो (, ? |)

1 क्या तुम आज हैदराबाद जाओगे

2 बाग में केला आम सेव तथा अमरुद के पेड़ हैं

3 मधु आज स्कूल आई है

18. मात्रा वाले शब्द लिखो | (अनुस्वार (ँ) अनुनासिक (ं))

.....
.....

SUBJECT ENHANCEMENT MATERIAL FOR CLASS 3

SUBJECT: MATH

I. Do the following.

$$\begin{array}{r} 1) \quad \quad 5 \ 3 \ 8 \\ + \quad 3 \ 6 \ 3 \\ \hline \end{array}$$

$$\begin{array}{r} 2) \quad \quad 6 \ 0 \ 5 \\ + \quad 1 \ 6 \ 2 \\ \hline \end{array}$$

$$\begin{array}{r} 3) \quad \quad 7 \ 4 \ 9 \\ + \quad 3 \ 6 \ 4 \\ \hline \end{array}$$

$$\begin{array}{r} 4) \quad \quad 6 \ 4 \ 2 \\ + \quad 5 \ 1 \ 7 \\ \hline \end{array}$$

$$\begin{array}{r} 5) \quad \quad 4 \ 3 \ 9 \\ + \quad 7 \ 5 \ 6 \\ \hline \end{array}$$

$$\begin{array}{r} 6) \quad \quad 5 \ 2 \ 8 \\ + \quad 7 \ 2 \ 5 \\ \hline \end{array}$$

$$\begin{array}{r} 7) \quad \quad 6 \ 4 \ 3 \\ + \quad 1 \ 6 \ 9 \\ \hline \end{array}$$

$$\begin{array}{r} 8) \quad \quad 7 \ 5 \ 8 \\ + \quad 3 \ 9 \ 4 \\ \hline \end{array}$$

$$\begin{array}{r} 9) \quad \quad 5 \ 9 \ 2 \\ + \quad 9 \ 3 \ 6 \\ \hline \end{array}$$

$$\begin{array}{r} 10) \quad \quad 5 \ 8 \ 9 \\ + \quad 6 \ 4 \ 4 \\ \hline \end{array}$$

$$\begin{array}{r} 11) \quad \quad 7 \ 0 \ 3 \\ + \quad 7 \ 6 \ 9 \\ \hline \end{array}$$

$$\begin{array}{r} 12) \quad \quad 9 \ 5 \ 6 \\ + \quad 4 \ 7 \ 8 \\ \hline \end{array}$$

II. Do the following.

$$\begin{array}{r} 1) \quad \quad 352 \\ - \quad 147 \\ \hline \end{array}$$

$$\begin{array}{r} 2) \quad \quad 743 \\ - \quad 118 \\ \hline \end{array}$$

$$\begin{array}{r} 3) \quad \quad 859 \\ - \quad 536 \\ \hline \end{array}$$

$$\begin{array}{r} 4) \quad \quad 475 \\ - \quad 328 \\ \hline \end{array}$$

$$\begin{array}{r} 5) \quad \quad 438 \\ - \quad 229 \\ \hline \end{array}$$

$$\begin{array}{r} 6) \quad \quad 670 \\ - \quad 315 \\ \hline \end{array}$$

$$\begin{array}{r} 7) \quad \quad 384 \\ - \quad 247 \\ \hline \end{array}$$

$$\begin{array}{r} 8) \quad \quad 576 \\ - \quad 327 \\ \hline \end{array}$$

$$\begin{array}{r} 9) \quad \quad 384 \\ - \quad 66 \\ \hline \end{array}$$

$$\begin{array}{r} 10) \quad \quad 843 \\ - \quad 129 \\ \hline \end{array}$$

$$\begin{array}{r} 11) \quad \quad 653 \\ - \quad 243 \\ \hline \end{array}$$

$$\begin{array}{r} 12) \quad \quad 966 \\ - \quad 458 \\ \hline \end{array}$$

III. Do the following.

155 <u>x 8</u>	935 <u>x 9</u>	583 <u>x 9</u>	884 <u>x 4</u>	267 <u>x 5</u>
766 <u>x 8</u>	757 <u>x 3</u>	875 <u>x 5</u>	365 <u>x 3</u>	736 <u>x 5</u>
879 <u>x 4</u>	699 <u>x 2</u>	649 <u>x 6</u>	936 <u>x 3</u>	573 <u>x 8</u>

IV. Write the after and before number of the given.

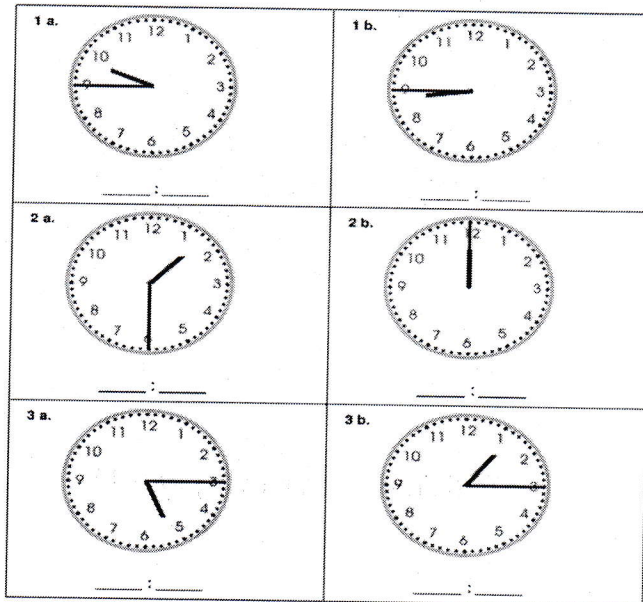
_____	127	_____
_____	221	_____
_____	673	_____
_____	310	_____
_____	999	_____

IV. Complete the given table.

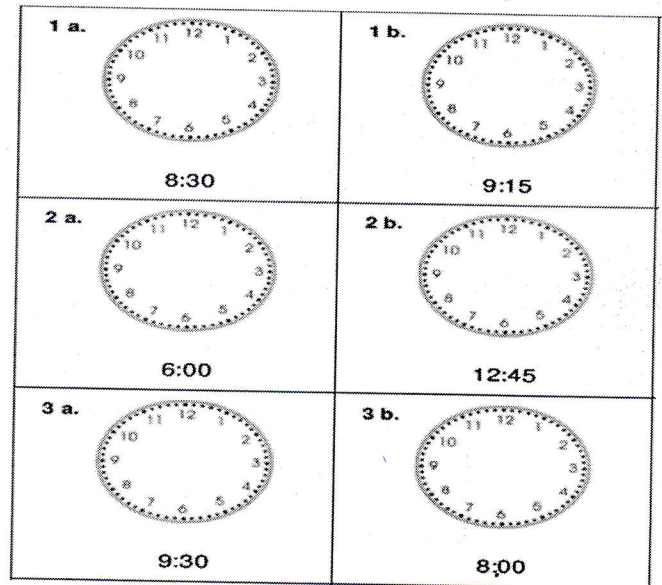
12 ÷ 2 =	36 ÷ 4 =
16 ÷ 4 =	21 ÷ 7 =
15 ÷ 3 =	45 ÷ 5 =
15 ÷ 5 =	18 ÷ 2 =
28 ÷ 7 =	54 ÷ 9 =
24 ÷ 6 =	49 ÷ 7 =

V. Do as per the instructions.

a. Read and write the time.



B. draw the hand of clocks.



VI. Fill in the blanks.

- Milk is measured in _____.
- The length of your book is measured in _____.
- The height of you is measured in _____.
- Fifth day of the week is _____.
- Eighth month of a year is _____.
- Last month of a year is _____.
- All schools are closed on _____.
- We get summer vacation during _____ month.
- Republic day is celebrated in _____ month.
- 1 kilogram = _____ grams.
- 1 m = _____ cm.
- 1 l = _____ ml.

VII. Complete the patterns.

- 25, 50, 75, _____, _____, _____.
- 20, 40, 60, _____, _____, _____.
- 100, 90, 80, _____, _____, _____.
- 11, 22, 33, _____, _____, _____.
- 155, 150, 145, _____, _____, _____.

VIII. Answer the following.

- a. Name the seven days of a week.
- b. Name the twelve months of a year.
- c. Draw four plane and four solid shapes and name them.
- d. Write the multiplication tables of 6 to 10.

IX. Write in words.

- a. Rs. 34.50
- b. Rs. 45.75
- c. Rs. 467.90
- d. Rs. 500.05

X. Do the following

- a. Rs. 65.50 - Rs. 47.25
- b. Add Rs. 17.59 and Rs. 20.47
- c. 80 kg 900 g - 58 kg 684 g
- d. Add 7 l 380 ml and 6 l 340 ml
- e. Subtract 16 m 45 cm from 45 m 66 cm

SUBJECT ENHANCEMENT MATERIAL

SUBJECT: SCIENCE

CLASS: III

SYLLABUS: CLASS II

I. ANSWER THE FOLLOWING QUESTIONS:

1. What does sun gives us?
2. What is communication?
3. Name any two sources of ground water.
4. Name any two commonly used fuels.
5. What is an occupation?
6. Why are trains also called railways?
7. What are external organs?
8. Why should we exercise regularly?
9. What is a joint family?
10. Why do we eat food?

II. FIND OUT THE MISSING LETTERS:

1. Organ that pumps blood. H _ _ _ t
2. We have ten of them in both feet. T _ _ s
3. Food is digested here. S _ _ _ _ h
4. They help us in walking. L _ _ S
5. Organ that controls all body activities. B _ _ _ n

III. FILL IN THE BLANKS:

1. Children love to play in _____
2. A _____ grows food for us.
3. _____ is the harvest festival of kerala.
4. Republic day is celebrated on the _____ January every year.
5. _____ transport is the fastest means of transport.

6. We wear wollen clothes in _____
7. A _____ builds the walls of a hous
- e. 8. We should cross the road only at a _____
9. There are _____ days in a week.
10. There are _____ directions

IV. Give two examples of each:

- | | | |
|---------------------|-------|-------|
| 1. Land transport | _____ | _____ |
| 2. Water transport | _____ | _____ |
| 3. Air transport | _____ | _____ |
| 4. Very big animals | _____ | _____ |
| 5. Small animals | _____ | _____ |

V. STATE TRUE OR FALSE:

1. We wear uniform at home. []
2. A tent house is made of blocks of ice. []
3. There are 60 minutes in a day. []
4. Always run on the road. []
5. There are 10 years in a decade. []

VII. DRAW THE FOLLOWIONG DIAGRAMS:

1. Plant and its parts.
2. Day sky
3. Sun
4. Night sky



Class : III

Subject Enhancement Material

Sub: Social

Syllabus: II

1. Use the **zebra / tiger** crossing to cross the road.
2. It rains heavily during the **summer / monsoon**.
3. Very high hills are called **plains / mountains**.
4. We grow crops on the **earth / moon**.
5. Some people go to a **park / church** to pray.

Match the following

- | | | |
|---------------------------------|-----|-------------------|
| 1. Hindus | () | a. woolen clothes |
| 2. Winter | () | b. autumn |
| 3. Many trees shed their leaves | () | c. west |
| 4. Sun sets in the | () | d. temple |
| 5. Compass | () | e. foot path |
| 6. Train | () | f. speed post |
| 7. Post cards | () | g. Internet |
| 8. E mail | () | h. post office |
| 9. Parcels | () | i. railway tracks |
| 10. Always walk on the | () | j. directions |

Rearrange the capital letters to make meaningful words and rewrite.

1. We need water to R K I D N. _____
2. We need water to K O O C food. _____
3. Police guard our E I N H G B U O R H O D O _____
4. Chess is an N I D O R O game. _____
5. People decorate their houses with O P O K A M L A S on Onam. _____

Answer the following in one word:

1. The big meal after lunch.

2. Igloos are made of this.

3. We see these in the zoo.

Name four sources of water.




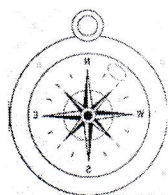
1. _____

2. _____

3. _____

4. _____

Identify the following pictures and write on the blanks.



Circle the following words in the word search. Choose the words from box.

Land, Soil, Spring, Rain, East

Y	L	A	N	D	S
S	G	R	B	N	O
E	D	D	R	V	I
A	F	B	A	B	L
S	P	R	I	N	G
T	R	M	N	S	M